


D

Annie had 36 stickers. She gave some of her stickers to Claire. Now Annie has 24 stickers. How many stickers did Annie give to Claire?

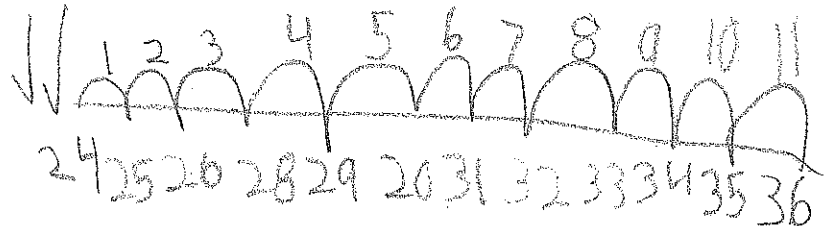


$$36 - 12 = 24$$

I know that Annie had 36 stickers and she gave away 24 so I started off with crossing out the first row then I counted the ones that were not crossed out and then I saw that there were 24 left then I just counted the ones that were not crossed out and I got 12.

Annie had 36 stickers. She gave some of her stickers to Claire. Now Annie has 24 stickers. How many stickers did Annie give to Claire?

Add  $\sqrt{24 + 12 = 36}$




Subtract

00 00 00 00  
 00 00 00 00  
 00 00 00 00  
 00 00 00 00  
 00 00 00 00

$\sqrt{36 - 12 = 24}$

D. Annie had 36 stickers. She gave some of her stickers to Claire. Now Annie has 24 stickers. How many stickers did Annie give to Claire?



$$C. 36 - 12 = 24$$

E. I know that  $12 + 12 = 24$  So I know thirty-six - 12 = 24.